


ADD → 4

Arithmetic Developed Daily



<, > or =

2 cm ○ 1 m

20 cm ○ 1 m

200 cm ○ 1 m

\$80.27

- 9.65

10,067

- 8,435

6 8

7 2

2 0

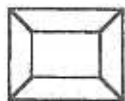

+4

+9

Name _____



Show how many triangles it takes to make each of these figures.



yard
foot

Twilla earned money babysitting over the summer. She spent \$183.45 of it on school clothes and had \$101.35 left. How much money did she earn?

Thought _____

Information _____

Plan _____

Solution _____