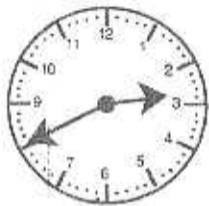
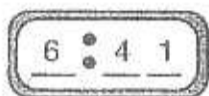
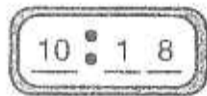
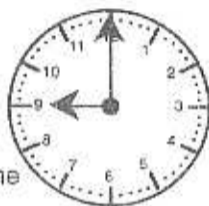


Arithmetic Developed Daily → 4



Write the time
A.M. or P.M.
School's out



_____ to _____
after

_____ to _____
after

_____ Bedtime

Zack took 24 rolls of pictures. Each roll had 12 pictures. How many pictures did he take?

Thought _____

Information _____

Plan _____

Solution _____



+ - X ÷

+ - X ÷