


# ADD → 4



Name \_\_\_\_\_

Write the numerals

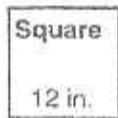
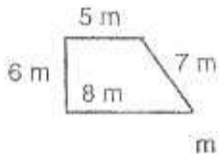
Three thousand sixty-two

\_\_\_\_\_

Five hundred forty-three

\_\_\_\_\_

Find the perimeters



Find the area

\_\_\_\_\_ sq. in.



\_\_\_\_\_



\_\_\_\_\_

One brand of cereal has 3 cups of raisins per box. A case contains 24 boxes. How many cups of raisins in a case of this cereal?

*Thought* \_\_\_\_\_

*Information* \_\_\_\_\_

*Plan* \_\_\_\_\_

*Solution* \_\_\_\_\_