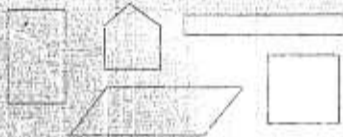


# ADD → 4


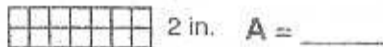
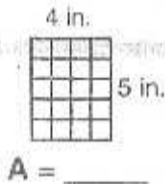
Arithmetic Developed Daily

Name \_\_\_\_\_

Put an "X" on the shapes that are rectangles



$$\begin{array}{r} 19 \\ 46 \\ +72 \\ \hline \end{array}$$



Mark is building model cars to sell. Each car needs 4 wheels. How many wheels will be needed for 22 cars?

*Thought* \_\_\_\_\_

*Information* \_\_\_\_\_

*Plan* \_\_\_\_\_

*Solution* \_\_\_\_\_